

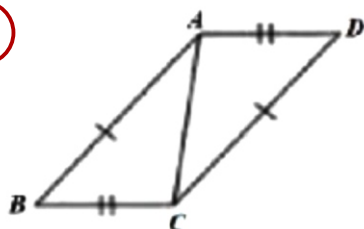
# Triangle Congruence Worksheet

Name: ..... Grade: ..... ID: .....

Triangle Congruence Test (SSS, SAS, AAS, RHS)

Complete the following.

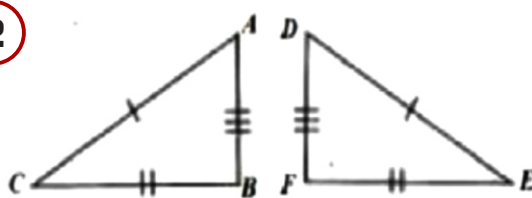
1



$\triangle ABC \cong \triangle$  **CDA**

by **SSS** congruence

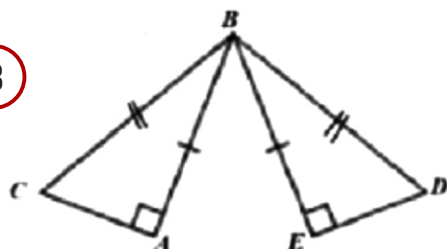
2



$\triangle ABC \cong \triangle$

by  congruence

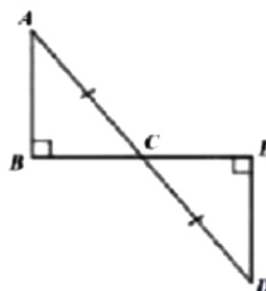
3



$\triangle ABC \cong \triangle$

by  congruence

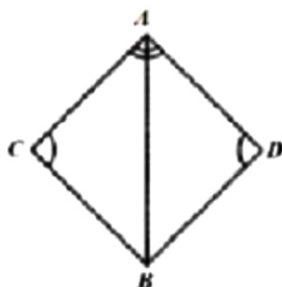
4



$\triangle ABC \cong \triangle$

by  congruence

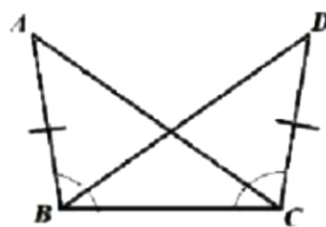
5



$\triangle ABC \cong \triangle$

by  congruence

6



$\triangle ABC \cong \triangle$

by  congruence